

HIST-2

**MMS Ancient Civilizations Quiz**

[Exam ID: VJ2ME5]

**Exam not valid for Paper Pencil Test Sessions**

- 1 **Which invention makes it possible to study the lives of people in ancient Egypt and ancient China?**
- A Compass
  - B Written language
  - C Kite
  - D Silk cloth



**The contributions in the pictures were made by —**

- A Early Englishmen    B Ancient China    C African Americans    D Ancient Egypt    E Native Americans

3 Directions: Click on each answer you want to select. You must select all correct answers.

**Choose each contribution made by ancient Egypt.**

Great Wall	Characters or symbols	Fireworks	Hieroglyphics
Pyramids	Compass	365 day calendar	Clock

4



**The picture shows —**

- A a pyramid
- B the Great Tower
- C a teepee
- D the Great Wall

5 **Hieroglyphics was the written language of the —**

- A ancient Egyptians
- B ancient Chinese
- C Native Americans
- D first Presidents

6 **The word architecture means —**

- A kinds of writing
- B making new items
- C planting in water
- D the design of buildings

7 **Rome is a city built on —**

- A many hills
- B a volcano
- C an island
- D flat land

8 **The human characteristics of Ancient Greece were —**

- A road builders, ship builders, and miners
- B weavers, ship builders, and miners
- C farmers, road builders, and traders
- D farmers, ship builders, and traders

9



**This picture shows —**

- A a pyramid
- B an aqueduct
- C the Great Wall
- D the Colosseum

10 **In the empire of Mali, how was salt used?**

- A To preserve food
- B To grow plants
- C To wash clothes
- D To make paper



**Which country is located in the area represented by the number 3?**

- A Egypt
- B South Africa
- C Mali
- D Ethiopia

**12 Ann likes to walk in the woods. Which ancient Chinese invention shows her which direction she is walking?**

- A Fireworks
- B Bronze
- C Great Wall
- D Compass

**13 Romans farmed the land —**

- A on hillsides
- B on the beach
- C on flat land
- D on top of mountains

- 14 **Which physical feature most helped ancient Greece and Rome to carry on trade?**
- A Mediterranean Sea
  - B Indian Ocean
  - C Sahara Desert
  - D Nile River
- 15 **What type of rulers led the empire of Mali?**
- A Republican presidents
  - B Powerful kings
  - C Traders
  - D Storytellers
- 16 **On which continent is Mali located?**
- A Asia
  - B North America
  - C Europe
  - D Africa
- 17 **What led to ancient Mali's growth in wealth and power?**
- A Storytelling
  - B Painting
  - C Trading
  - D Farming



**Which country is labeled with the number 4?**

- A Greece
- B Egypt
- C Italy
- D France

**19 Which of the following describes the soil found in Ancient Greece?**

- A Wet, rocky soil
- B Soil with red clay
- C Dry, hard soil
- D Limited, rich soil

**20 What was the oral tradition of Mali?**

- A Reading books
- B Writing music
- C Telling stories
- D Painting pictures

**21 On which continent is Egypt located?**

- A South America
- B North America
- C Africa
- D Europe

22 Click on the two correct answers.

**Identify the two human characteristics NOT associated with ancient Greece.**

- Miners
- Farmers
- Road builders
- Traders
- Shipbuilders

23 **What desert was Mali located next to?**

- A Gobi Desert
- B Mojave Desert
- C Sahara Desert
- D Atacama Desert

24



**Which number shows where China is located?**

- A 2
- B 3
- C 4
- D 1

25 **On which continent was ancient Greece located?**

- A Australia
- B South America
- C Europe
- D Antarctica
- E Africa
- F North America
- G Asia



26 **Look at the map.**



**Which number shows where Egypt is located?**

- A 1
- B 3
- C 4
- D 2

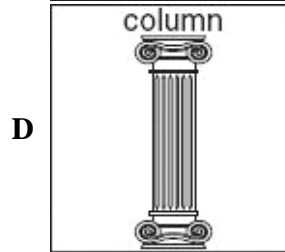
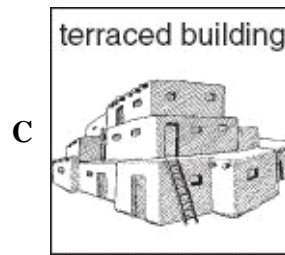

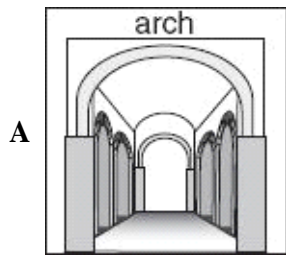
27 **Directions:** Click on the two correct answers.

**Which two natural resources were important to the economy of ancient Mali?**

- Rice
- Salt
- Silver
- Gold

- 28 **What jobs did people in Greece, Rome, and Mali have in common?**
- A Road building
  - B Ship building
  - C Farming
  - D Mining
- 29 **On which continent is China located?**
- A Australia
  - B Europe
  - C Asia
  - D North America
- 30 **What type of architecture is found in the Roman Colosseum and aqueducts?**
- A Roof
  - B Arches
  - C Columns
  - D Doors
- 31 **In which area did ancient Greece and Rome contribute most to life in the United States today?**
- A Cooking
  - B Government
  - C Transportation
  - D Clothing

32 **An example of Greek architecture is the —**



33 **What building still exists in Rome?**

- A The White House
- B Colosseum
- C Parthenon
- D The Supreme Court

34 **Which picture shows the Roman aqueducts?**

A



B



C



D



35 **The government of the United States is based on the ideas developed in ancient-**

- A Rome and China
- B Greece and Rome
- C Greece and Egypt
- D Rome and Egypt

36 **A government is a representative democracy if —**

- A the king and queen make all of the laws and rules
- B only men can vote for which rules and laws are made
- C the people elect a smaller group of citizens to make their rules and laws
- D rules and laws are made by all the people together

37 **Which of the following is a direct democracy?**

- A A government in which people vote to make their own rules and laws
- B A government in which only men can vote
- C A government in which people elect a small group to make the rules and laws for everyone
- D A government in which only women can vote

38 **Which picture shows the Parthenon?**



- 39 **What form of government was found in ancient Greece?**
- A Representative democracy
  - B Republican democracy
  - C Olympic democracy
  - D Direct democracy
- 40 **The birthplace of democracy was —**
- A Greece
  - B America
  - C Rome
  - D China
- 41 **What form of government was developed in ancient Rome?**
- A Direct democracy
  - B Royal democracy
  - C Representative democracy
  - D Free democracy

42 Which picture shows the Roman Colosseum?

A



B



C



D



43 Mosaics, sculptures, and paintings are often displayed on —

- A faces
- B buildings
- C cars
- D street signs

44 Directions: Click on the correct answers.

**Which of the following are natural resources from the ancient civilization of Mali that they would have used for trading?**

Salt	Natural Gas
Coal	Gold
Oil	

**Eastern Hemisphere**

**Which number on this map shows the location of Mali?**

- A 1
- B 2
- C 3
- D 4

**46 Which of the following are human characteristics of Romans?**

- A Farmers, ship builders, and miners
- B Traders, miners, and weavers
- C Farmers, road builders, and traders
- D Road builders, traders, and miners

**47 Greece is surrounded by —**

- A the Sahara Desert
- B the Empire of Mali
- C the Mediterranean Sea
- D Italy