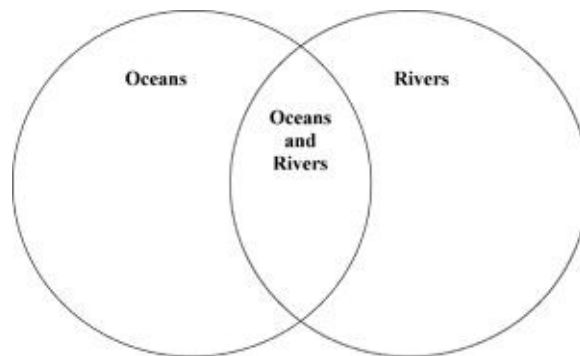


Exam not valid for Paper Pencil Test Sessions

- 1 **This environment has fresh water. At times the water flows quickly, and many animals and plants live there. What environment is described?**

A Swamp
B Pond
C Ocean
D River

2



Which statement should be placed in the Oceans and Rivers section?

A There are sharks and whales here.
B Many plants and fish survive here.
C There is salt water.
D There is fresh water.

- 3 **Which group of animals lives in the ocean?**

A Shark, whale, and stingray
B Walrus, arctic fox, and seal
C Squirrel, deer, and salmon
D Zebra, elephant, and lion

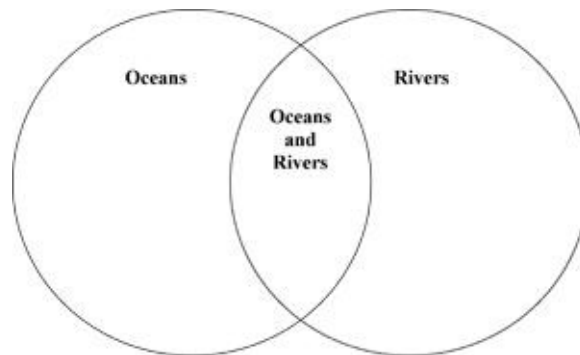
4 **Which type of water is found in all ponds, lakes, and streams?**

- A Brackish water
- B Fresh water
- C Polluted water
- D Salt water

5 **This habitat has salty water. It covers more space on the globe than land. Turtles, sharks, whales and plankton live here. What environment is described?**

- A Marshland
- B Forest
- C Ocean
- D Pond

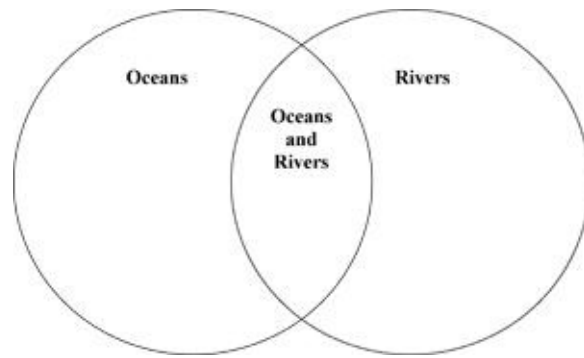
6



Which description would go under Rivers?

- A Whales
- B Salt water
- C Fresh water
- D Stingray

7



What could be added to the Oceans section of the Venn diagram?

- A Salt water is found here.
- B Fresh water is found here.
- C These can be found in most states.
- D These are home to freshwater bass.

8 **Which organism would most likely be found living in a pond ecosystem?**


- | | | | |
|-----------|-------------|--------------|--------------|
| A Ladybug | C Onion | E Squirrel | G Bald eagle |
| B Mouse | D Rose bush | F Brown bear | H Lily pad |

9 Directions: Click on each answer you want to select. You must select all correct answers.



Identify organisms that belong in the ecosystem shown.

Frog	Lizard	Butterfly	Lobster	Fish	Coral
------	--------	-----------	---------	------	-------



The organisms in Group A represent —

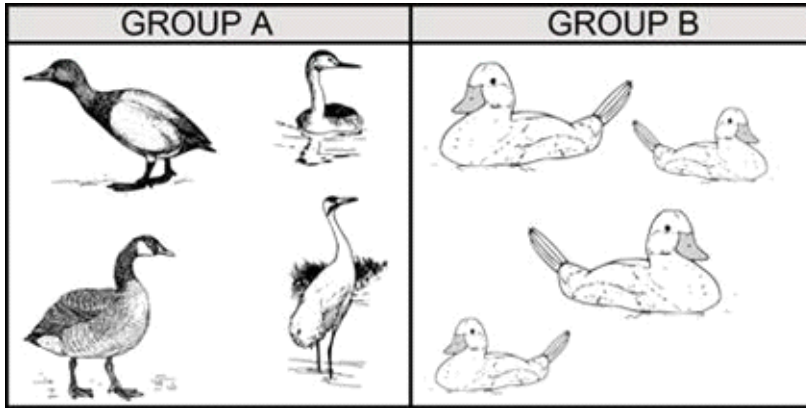
- A a community
- B mimicry
- C producers
- D a population

11 The population in a habitat refers to —

- A all the plants and animals that live together
- B the total number of a certain kind of animal
- C all the plants in an environment
- D all the animals in an environment

12 The community in a habitat refers to —

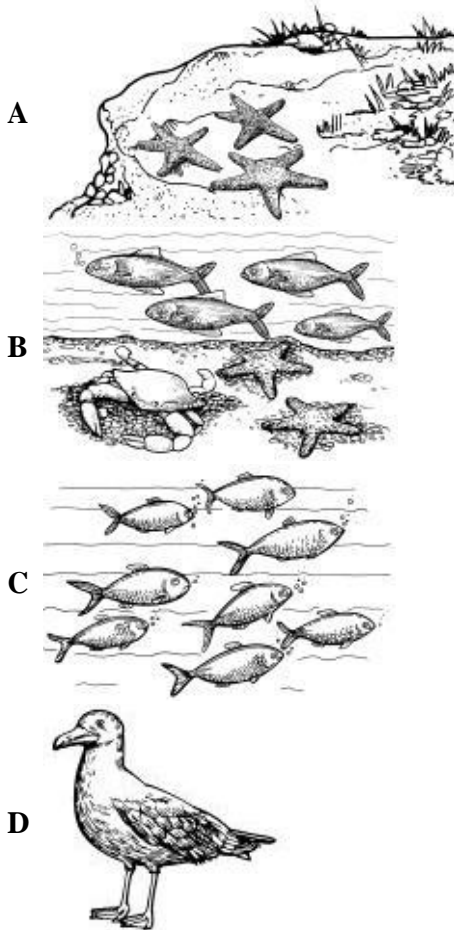
- A the total number of a certain plant
- B the people who live there in a big group
- C the total number of a certain animal
- D the plants and animals that live together



The animals shown live in a river ecosystem. Group B represents a —

- A producer
- B mimicry
- C population
- D community

14 Which picture shows an ocean community?



- 15 Directions: Click on each answer you want to select. You must select all correct answers.

Identify examples of communities.

A forest

A swamp

A flock of geese

A colony of bees

- 16 **Which of these activities would be least damaging to a duck's habitat?**
- A Planting trees and bushes
 - B Using a lot of fertilizer
 - C People walking along the lake's edge
 - D Fishermen catching fish
- 17 **A wetland habitat can continue to support the birds and fish that live there if people —**
- A drain the water away
 - B flood the highest parts of the land
 - C use the land for planting crops
 - D leave the land alone