

Exam not valid for Paper Pencil Test Sessions

- 1 **Which group of people built pyramids?**
 - A Indians
 - B Americans
 - C Ancient Chinese
 - D Ancient Egyptians

- 2 **The word contribution means —**
 - A laws people follow
 - B giving or doing something
 - C resources we use
 - D making something new

- 3 **Which ancient Chinese invention is MOSTLY used on the Fourth of July?**
 - A Bronze
 - B Kites
 - C Silk cloth
 - D Fireworks



Kim owns the store above. Which ancient Chinese invention does Kim most likely sell in her store?

- A Kite
- B Silk cloth
- C Fireworks
- D Compass

5 Which ancient Egyptian invention is used MOST often in schools today?


- A Paper
- B Hieroglyphics
- C Compass
- D Silk cloth

6 Ann likes to walk in the woods. Which ancient Chinese invention shows her which direction she is walking?

- A Great Wall
- B Compass
- C Fireworks
- D Bronze

7 Which group of people invented the 365-day calendar?

- A Ancient Chinese
- B Americans
- C Indians
- D Ancient Egyptians




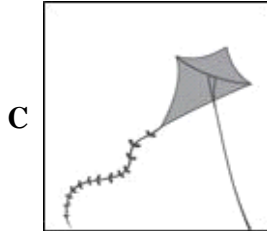


This picture shows —

- A the Colosseum
- B a pyramid
- C the Great Wall
- D an aqueduct

9 **Which group of people built the Great Wall?**

- A Powhatan Indians
- B Ancient Chinese
- C Ancient Egyptians
- D Americans

10 Which picture shows what the ancient Egyptians invented?



11 Hieroglyphics was the written language of the —

- A first Presidents
- B ancient Egyptians
- C Native Americans
- D ancient Chinese




The picture shows —

- A the Great Wall
- B a teepee
- C a pyramid
- D the Great Tower

13 Directions: Click on each answer you want to select. You must select all correct answers.

Choose each contribution made by ancient Egypt.

Clock	Great Wall	Fireworks	Characters or symbols
Pyramids	365 day calendar	Hieroglyphics	Compass



The contributions in the pictures were made by —

- A Ancient Egypt B Early Englishmen C Native Americans D Ancient China E African Americans

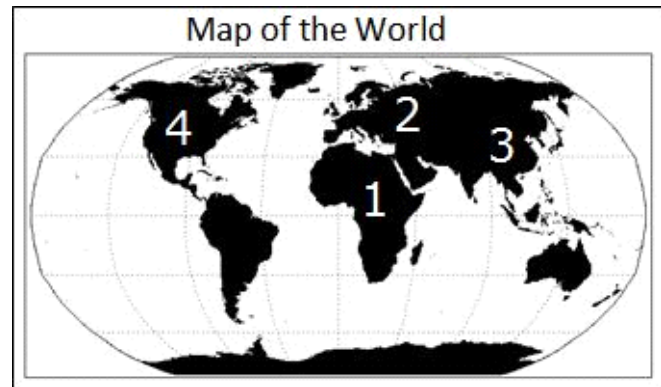
15 Which invention makes it possible to study the lives of people in ancient Egypt and ancient China?

- A Compass
 B Written language
 C Kite
 D Silk cloth

16 **On which continent is Egypt located?**

- A Europe
- B South America
- C North America
- D Africa

17



Which number shows where China is located?

- A 2
- B 3
- C 1
- D 4

18 Look at the map.



Which number shows where Egypt is located?

- A 2
- B 3
- C 1
- D 4

The World



The darker-shaded area on this map is the country of —

- A China
- B Egypt
- C France
- D England

20 Directions: Click on the five correct answers.

Select the Earth's five major oceans.

Atlantic

Gulf

Arctic

Eastern

Pacific

Indian

Southern

The World

What number shows the location of the Pacific Ocean?

- A 1
- B 2
- C 3
- D 4